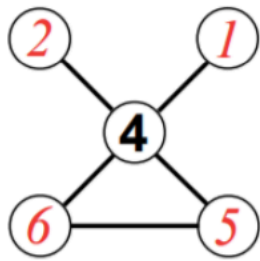
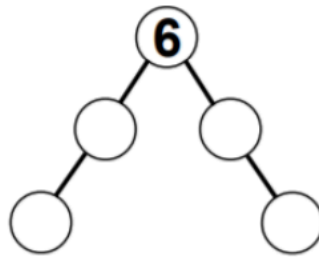


# Totalines

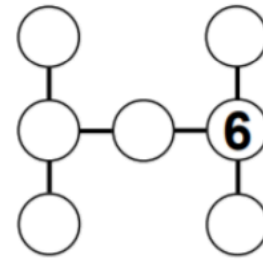
Numbers have to be placed in the empty circles. The numbers to be used are listed under each diagram and no given number may be used twice. The object is to place the numbers so that all those which lie along a straight line, as shown by the lines drawn, add up to the total which is also given under the diagram. The first one has been done for you.



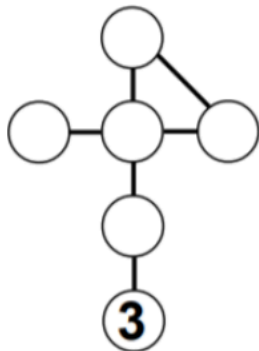
Use 1, 2, 5, 6  
Total 11



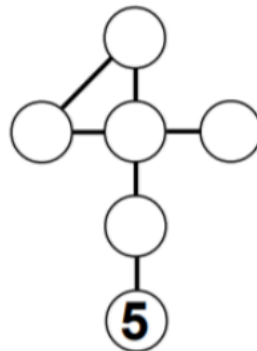
Use 2, 3, 4, 5  
Total 13



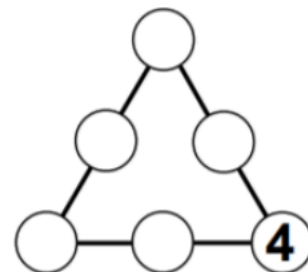
Use 0, 1, 2, 3, 4, 5  
Total 10



Use 1, 2, 4, 5, 6  
Total 11

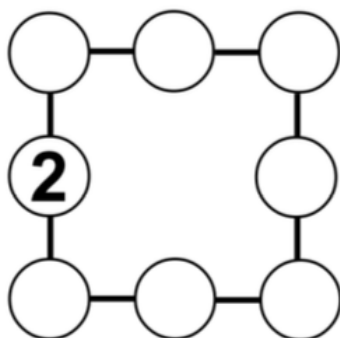


Use 0, 1, 3, 4, 6  
Total 10

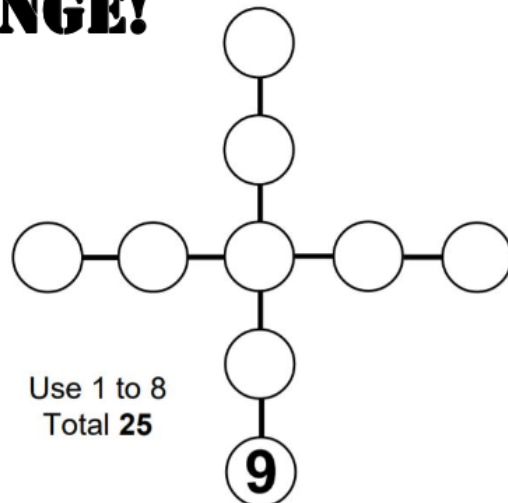


Use 0, 1, 2, 3, 5  
Total 9

## CHALLENGE!



Use 3, 4, 5, 6, 7, 8, 9  
Total 18



Use 1 to 8  
Total 25